

**Task 1. Calculate.**

$9 + 2 = \boxed{\phantom{00}} \boxed{\phantom{00}}$

$9 + 9 = \boxed{\phantom{00}} \boxed{\phantom{00}}$

$9 + 5 = \boxed{\phantom{00}} \boxed{\phantom{00}}$


$9 + 7 = \boxed{\phantom{00}} \boxed{\phantom{00}}$

$9 + 6 = \boxed{\phantom{00}} \boxed{\phantom{00}}$


$9 + 4 = \boxed{\phantom{00}} \boxed{\phantom{00}}$

**Task 2. Colour the circle with the correct answer.**


$9 + 2$



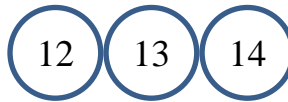
$9 + 8$



$9 + 7$



$9 + 3$

**Task 3**

**For her birthday, Maria invited 9 girls and 5 boys. How many children did Maria invite in total?**

*Solution:*

--	--	--	--	--	--

*Answer:*

--	--

**Task 4**

**9 red and 9 green balloons were used to decorate the hall for Maria's birthday. How many balloons were used in total?**

*Solution:*

--	--	--	--	--	--

*Answer:*

--	--